




Schede Natalizie con consegne in CAA






8	7	3	9
---	---	---	---




7	10	3	4
---	----	---	---




9	3	5	1
---	---	---	---




9	5	8	1
---	---	---	---




6	8	9	5
---	---	---	---




8	1	2	3
---	---	---	---



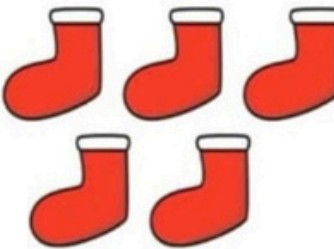
7	2	4	6
---	---	---	---



4	7	10	6
---	---	----	---




2	6	4	5
---	---	---	---



5	6	2	10
---	---	---	----



4	7	2	6
---	---	---	---



7	3	9	5
---	---	---	---



Maggiore, minore o uguale?



>



<



=



>



<



=



Maggiore, minore o uguale?



Maggiore, minore o uguale?





NELLA 	CASA 	DI >	BABBO NATALE 	CI SONO -	10 10	ELFI
-----------	----------	---------	------------------	--------------	----------	----------

CHE 	PREPARANO 	I ▶	REGALI 	E +	3 3	ELFI
---------	---------------	--------	------------	--------	--------	----------

CHE 	PREPARANO 	I ▶	DOLCI.
---------	---------------	--------	------------

QUANTI 	SONO -	GLI ▶	ELFI 	IN TUTTO?
------------	-----------	----------	----------	---------------



1

QUANTI 	ELFI 	CHE 	PREPARANO 	I ▶	REGALI?
------------	----------	---------	---------------	--------	-------------



QUANTI 	ELFI 	CHE 	PREPARANO 	I ▶	DOLCI?
------------	----------	---------	---------------	--------	------------



2

CONTA 	GLI ▶	ELFI
-----------	----------	----------

3

IN TUTTO 	CI SONO -		ELFI
--------------	--------------	--	----------